







Ms. Claire Amato

Primary Year 3 S3.1 TRAVELLING AROUND THE MALTESE ISLANDS Worksheet

S3.1.1 Identifying modes of transport in Malta and abroad

A. Circle the modes of transport:



Ms. Claire Amato

B.

Match:



an ambulance

a tourist



a ship

coachmen



a war tank

a nurse



a horse-driven
carriage

a captain



an aeroplane

a soldier



Ms. Claire Amato

C. Identify the means of transport that can be used by these people.

Find the answers in the box below. Don't use all the given words!

1. Matteo goes to school in his locality. _____
2. Nadia lives in Valletta. She visits her grandma who is in hospital. _____
3. Rebecca is a Gozitan lady who works in *Mellieħa*, Malta. _____
4. Sario needs to transport stones from a quarry. _____
5. Thelma, Bertha u Alan work in the same office. _____

il-karozza tal-linja, il-karrettun, il-karozzin, il-vapur, il-karozza privata, ir-rota,
it-trakk, id-dgħajsa, l-ajruplan

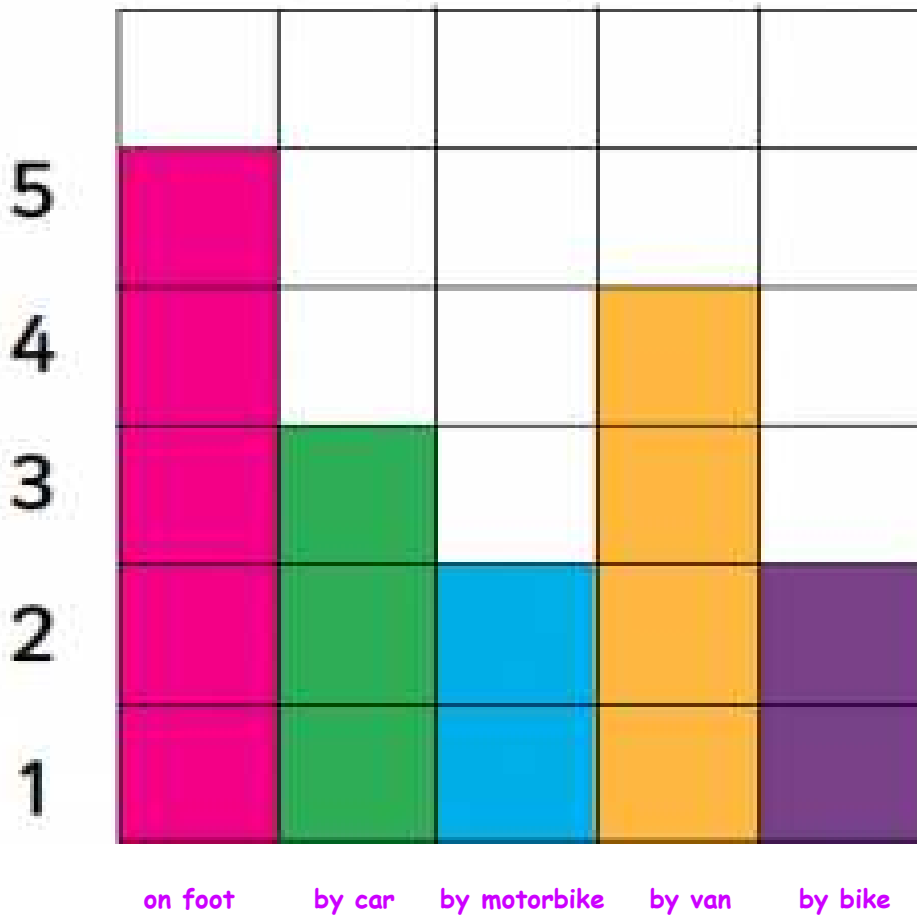
D. Cut and Paste: Locally (in Malta) or abroad?



Locally (in Malta)	Abroad

Ms. Claire Amato

D. The bar graph below shows the means of transport Year 3 children attending Birgu primary use to attend school:



Answer:

1. Which is the most popular means of transport? _____
2. Which two means of transport are least popular? _____ and _____
3. How many children go to school by van? _____
4. Which two means of transport do not harm the environment?
_____ and _____
5. How are they efficient? _____
6. How do you go to school? _____